



VIDURA COLLEGE – Colombo

Revision Paper - 2024

Mathematics

Grade 1


Name : _____

Class: _____

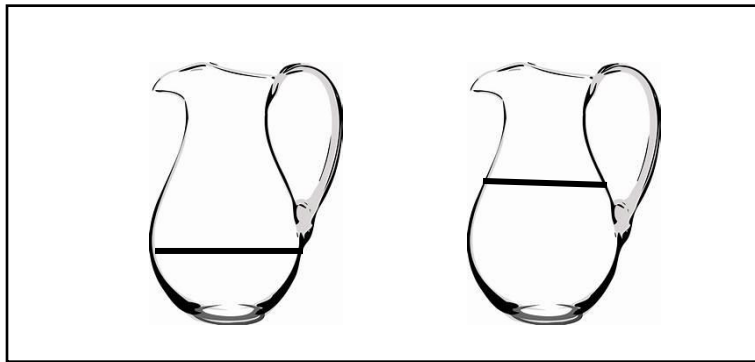
- 01) a) Draw 3 circles and 3 triangles in the given box.
b) Colour the triangles in red and circles in yellow.
c) Sort them according to their colour.

```
graph TD; A[Large Box] --- B[Small Box]; A --- C[Small Box];
```

02) a) Colour the biggest fish in blue and circle the smallest fish.



b) Circle the vessel that has more water.



c) Draw a bird in front of the elephant.




03)a) Draw 2 patterns using the given number of circles.



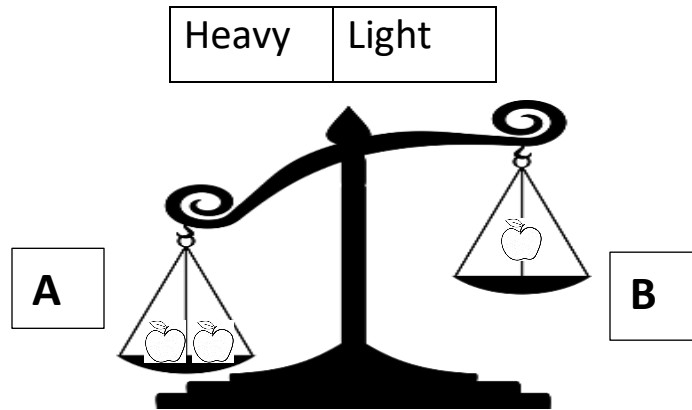
--	--

b) The engine given below is made of shapes. Fill in the grid



Name of the shape	Number of shapes

04) a) Name the sides of the scale according to their weight.




A -

B -

5) Write the number that comes before and after.

- | | | |
|----------|-------|-------|
| a) | 9 | 10 |
| b) | 8 | |
| c)..... | 4 | |
| d) 5 | | |
| e) 7 | | 9 |


06) Match the picture with the correct time of the day.



Morning



Evening



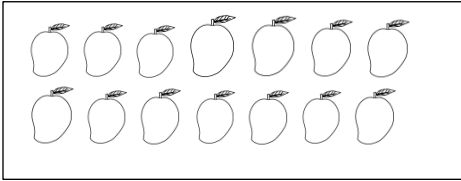
Noon

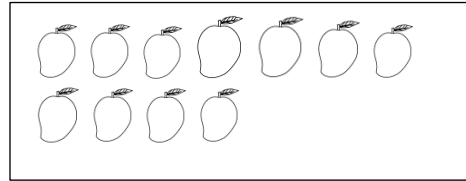



Night


07) Count the mangoes in each box and write the correct number name.

a)

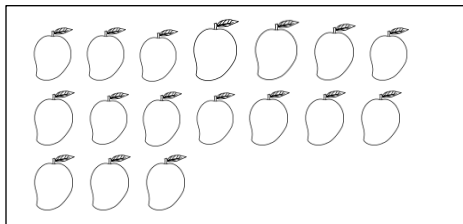




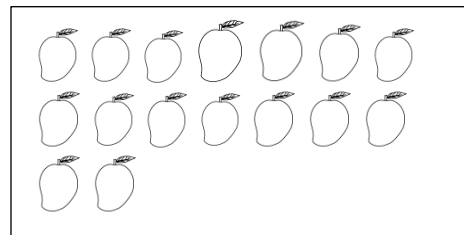




e)



f)



08) Add and write the answers.

5	+	3	=	
---	---	---	---	--

7	+	2	=	
---	---	---	---	--

6	+	2	=	
---	---	---	---	--

4	+	3	=	
---	---	---	---	--

3	+	3	=	
---	---	---	---	--

09) Subtract and match to the correct answer.

a) $5 - 1 = 5$

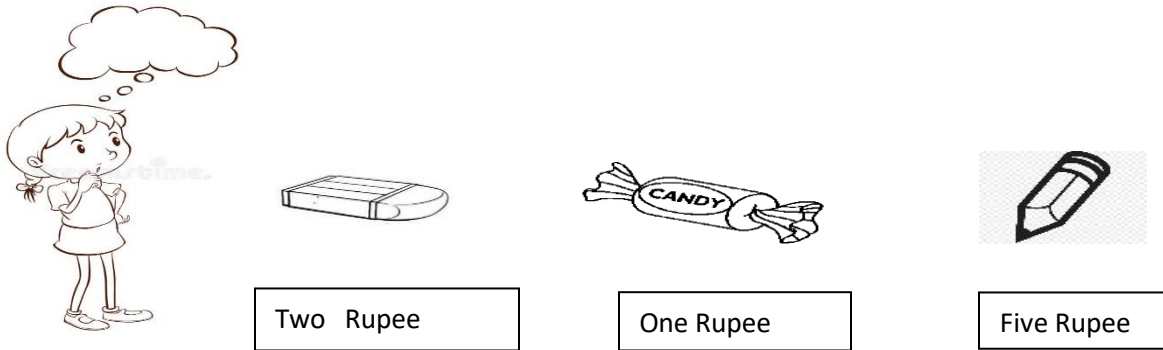
b) $7 - 2 = 7$

c) $9 - 3 = 3$

d) $6 - 3 = 6$

e) $9 - 2 = 4$

10) Mala wants to buy below items. Draw the coins that she uses to pay.



1) The coin used to buy a toffee?

2) The coin/coins used to buy an eraser?

3) The coin/ coins used to buy a pencil?

4) How many toffees can she buy for five rupees?

5) What is the total cost for an eraser and a toffee?